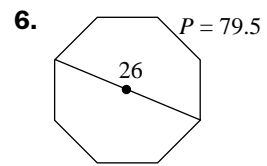
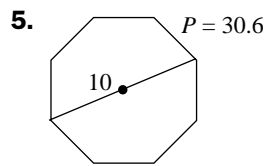
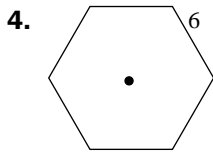
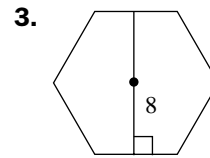
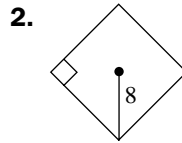
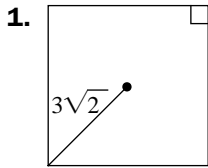


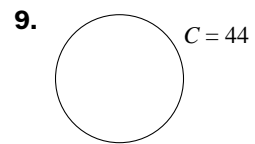
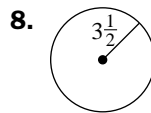
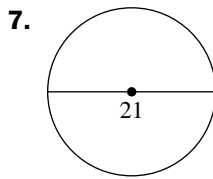
Practice 51

FOR USE WITH SECTION 7.5

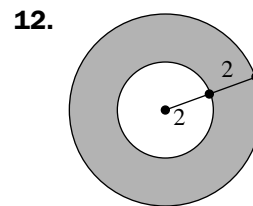
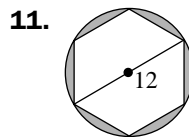
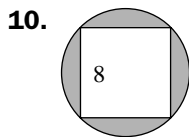
Find the area of each regular polygon.



Find the area of each circle.



Find the area of each shaded region. Each polygon is regular.



Find the area of each shaded region. Each outer polygon is regular.

